

6.1 Adding Integers Using Models

Created by Mr. Bonavota

Follow along on the teacher's presentation to complete the following examples.

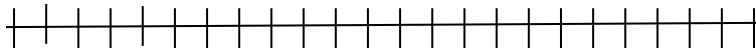
Adding Integers Using Counters

a) $(+4) + (+3)$

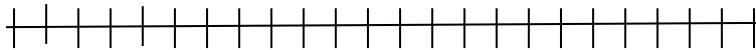
b) $(+4) + (-3)$

Adding Integers Using Number Lines

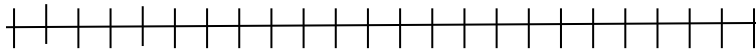
a) $(+4) + (+3)$



b) $(+6) + (-3)$



c) $(+2) + (-5)$



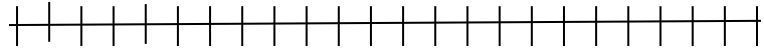
Try it on your Own

Complete each question below using the counter model **and** the number line model.


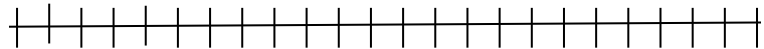
a) $(+4) + (-2)$




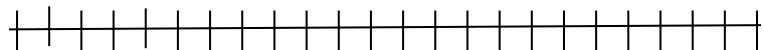
b) $(+2) + (+3)$



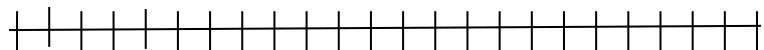

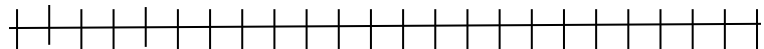
c) $(-2) + (-1)$



d) $(-8) + (+11)$



e) $(+3) + (-4)$



f) $(+7) + (-9)$

